


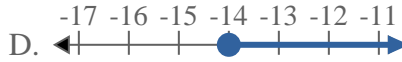
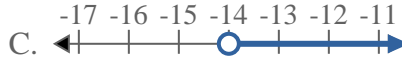
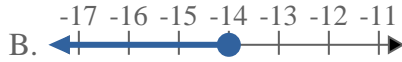
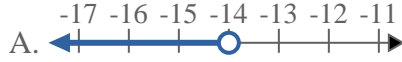


Solve each problem.

1) Which option best shows $X \leq 15$



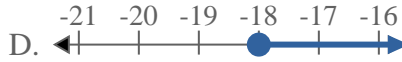
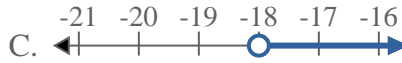
2) Which option best shows $X < -14$



3) Which option best shows $X > -7$



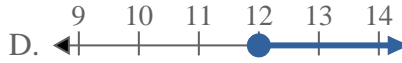
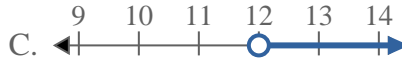
4) Which option best shows $X \geq -18$



5) Which option best shows $X > 13$



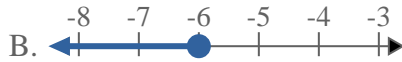
6) Which option best shows $X \leq 12$



7) Which option best shows $X \leq -18$



8) Which option best shows $X \leq -6$




Answers

1. _____
2. _____
3. _____
4. _____
5. _____
6. _____
7. _____
8. _____

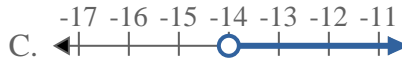
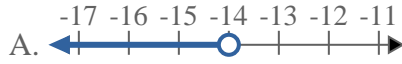


Solve each problem.

1) Which option best shows $X \leq 15$



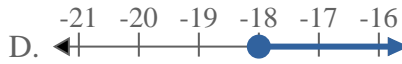
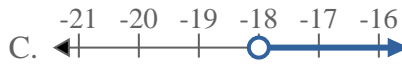
2) Which option best shows $X < -14$



3) Which option best shows $X > -7$



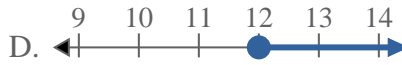
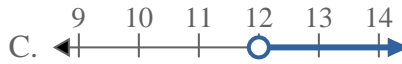
4) Which option best shows $X \geq -18$




5) Which option best shows $X > 13$



6) Which option best shows $X \leq 12$



7) Which option best shows $X \leq -18$



8) Which option best shows $X \leq -6$



Answers

1. **B**
2. **A**
3. **C**
4. **D**
5. **C**
6. **B**
7. **B**
8. **B**